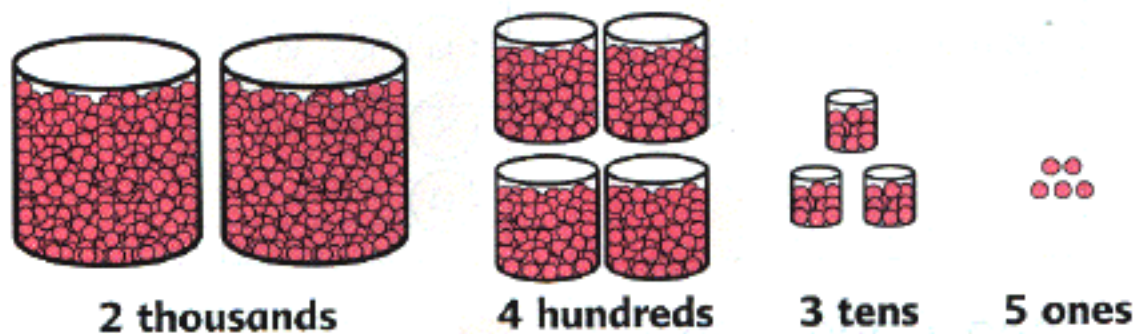


(b) His sister also collected some marbles.



$2000 + 400 + 30 + 5 = \blacksquare$   
How many marbles did she collect?



Two thousand, four hundred thirty-five



(c) Read the numbers 5998 and 6012.

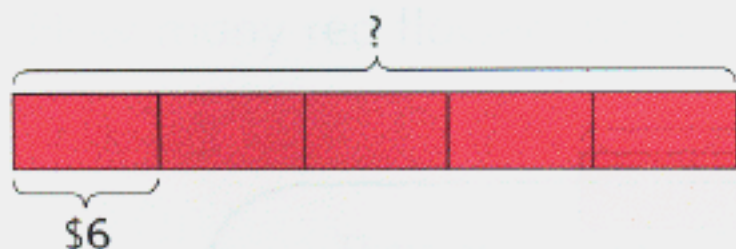
(d) Count from 5998 to 6012.

5998, 5999, 6000, ...6012.



(e) Count from 9987 to 10,000.

3. 5 children shared the cost of a present equally.  
Each of them paid \$6.  
What was the cost of the present?



1 unit = \$6  
5 units = \$6 × 5

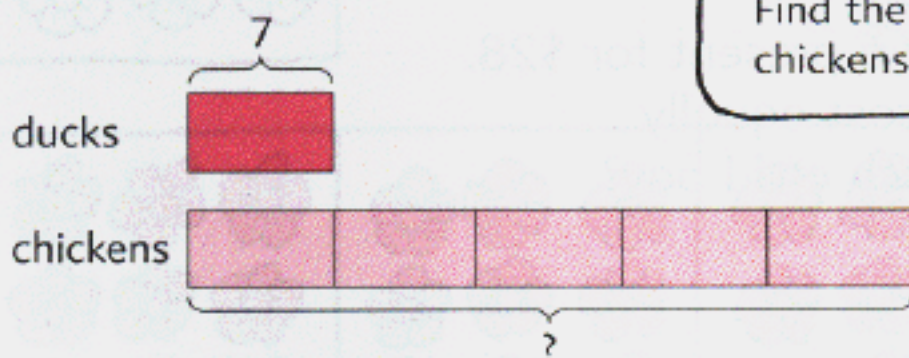
$$6 \times 5 = \blacksquare$$

The cost of the present was \$ $\blacksquare$ .



Workbook Exercise 19

4. A farmer has 7 ducks.  
He has 5 times as many chickens as ducks.  
How many more chickens than ducks does he have?



Find the number of chickens first.


$$7 \times 5 = 35$$

He has 35 chickens.

$$35 - 7 = \blacksquare$$

He has  $\blacksquare$  chickens more than ducks.

Workbook Exercise 20



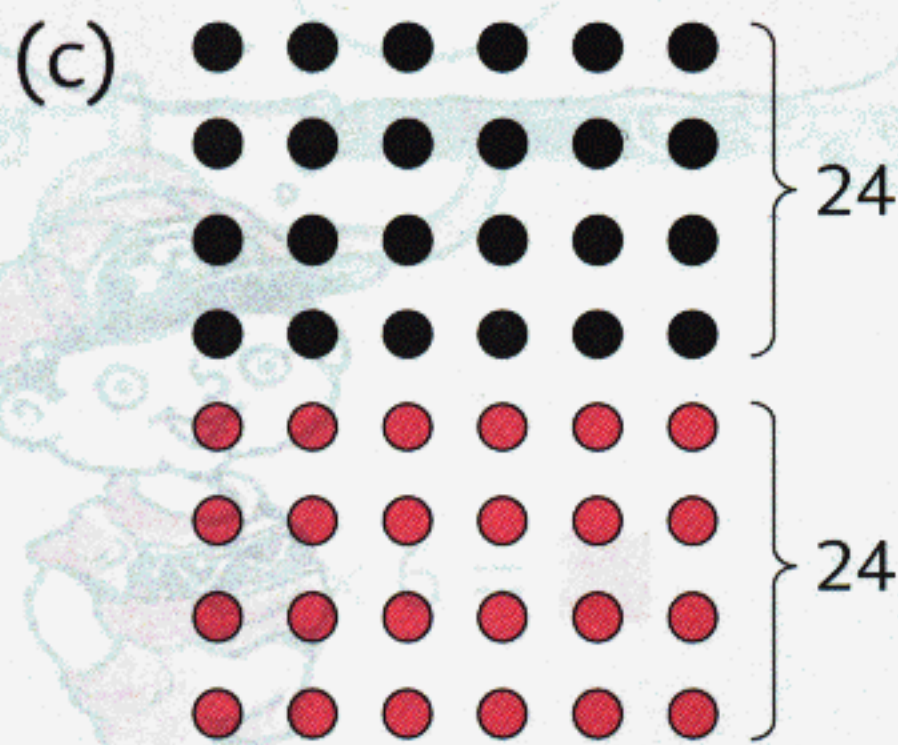
$6 \times 7 = 30 + 12$



$6 \times 5 = 30$

$6 \times 2 = 12$

$6 \times 7 = \blacksquare$




$6 \times 8 = 24 \times 2$



$6 \times 4 = 24$

$6 \times 8 = \blacksquare$



$6 \times 9 = 60 - 6$




$6 \times 10 = 60$

$6 \times 9 = \blacksquare$

## PRACTICE 4B

Find the value of each of the following:

- | (a)              | (b)            | (c)            | (d)            |
|------------------|----------------|----------------|----------------|
| 1. $4 \times 7$  | $7 \times 6$   | $7 \times 3$   | $9 \times 7$   |
| 2. $28 \div 7$   | $42 \div 7$    | $21 \div 7$    | $63 \div 7$    |
| 3. $7 \times 40$ | $608 \times 7$ | $7 \times 800$ | $930 \times 7$ |
| 4. $95 \div 7$   | $540 \div 7$   | $714 \div 7$   | $805 \div 7$   |
5. A baker needs 7 eggs to bake a cake.  
He has 150 eggs.  
How many cakes can he bake?  
How many eggs will be left over?
6. There are 7 days in a week.  
How many days are there in 52 weeks?
7. Mr. Wong is 7 times as old as his grandson.  
He is 63 years old.  
How old is his grandson?
8. 1 kg of prawns cost \$26.  
Chelsea bought 7 kg of prawns.  
How much did he pay?
- 
9. Lindsey spent \$84 on 7 towels.  
What was the cost of 1 towel?
10. Taylor packed 112 lemons into bags of 7 each.  
She sold all the lemons at \$3 a bag.  
How much money did she receive?
11. A jacket cost 7 times as much as a T-shirt.  
If the T-shirt cost \$26, what was the total cost of the T-shirt and the jacket?